

Tuesday 12 June 2012 – Morning

**GCSE GATEWAY SCIENCE
SCIENCE B**

B711/01 Science modules B1, C1, P1 (Foundation Tier)

Candidates answer on the Question Paper.
A calculator may be used for this paper.

OCR supplied materials:
None

Other materials required:

- Pencil
- Ruler (cm/mm)

Duration: 1 hour 15 minutes



Candidate forename		Candidate surname	
-----------------------	--	----------------------	--

Centre number							Candidate number				
---------------	--	--	--	--	--	--	------------------	--	--	--	--

INSTRUCTIONS TO CANDIDATES

- Write your name, centre number and candidate number in the boxes above. Please write clearly and in capital letters.
- Use black ink. HB pencil may be used for graphs and diagrams only.
- Answer **all** the questions.
- Read each question carefully. Make sure you know what you have to do before starting your answer.
- Write your answer to each question in the space provided. Additional paper may be used if necessary but you must clearly show your candidate number, centre number and question number(s).
- Do **not** write in the bar codes.

INFORMATION FOR CANDIDATES

- Your quality of written communication is assessed in questions marked with a pencil (✎).
- A list of equations can be found on page 2.
- The Periodic Table can be found on the back page.
- The number of marks is given in brackets [] at the end of each question or part question.
- The total number of marks for this paper is **75**.
- This document consists of **32** pages. Any blank pages are indicated.

EQUATIONS

energy = mass × specific heat capacity × temperature change

energy = mass × specific latent heat

$$\text{efficiency} = \frac{\text{useful energy output} (\times 100\%)}{\text{total energy input}}$$

wave speed = frequency × wavelength

power = voltage × current

energy supplied = power × time

$$\text{average speed} = \frac{\text{distance}}{\text{time}}$$

distance = average speed × time

$$s = \frac{(u + v)}{2} \times t$$

$$\text{acceleration} = \frac{\text{change in speed}}{\text{time taken}}$$

force = mass × acceleration

weight = mass × gravitational field strength

work done = force × distance

$$\text{power} = \frac{\text{work done}}{\text{time}}$$

power = force × speed

$$\text{KE} = \frac{1}{2}mv^2$$

momentum = mass × velocity

$$\text{force} = \frac{\text{change in momentum}}{\text{time}}$$

GPE = mgh

$$\text{resistance} = \frac{\text{voltage}}{\text{current}}$$

BLANK PAGE

Question 1 begins on page 4.

PLEASE DO NOT WRITE ON THIS PAGE

Answer **all** the questions.

Section A – Module B1

1 Bethany is a scientist.



Look at the list of Bethany's characteristics.

- blood group O**
- body mass of 60 kg**
- 1.65 m tall**
- has pierced ears**
- speaks English**

(a) Write down **two** characteristics that are a result of **both** environmental and inherited factors.

Choose your answers from the list.

- 1
- 2 [2]

(b) Bethany is testing some common foods to find their protein content.

Proteins are made of lots of small molecules joined together.

Write down the name of these molecules.

..... [1]

2 Malaria is an infectious disease.

(a) (i) Which type of pathogen causes malaria?

Put a ring around the correct answer.

bacteria

fungi

protozoa

virus

[1]

(ii) One symptom of malaria is a high fever.

Paracetamol is a drug that can be used to reduce fever.

A boy has a temperature of 41 °C.

How much is this above **normal** core body temperature?

..... °C

[1]

(iii) Describe **one other** use of paracetamol and the effect it has on the body.

.....
..... [2]

(b) Malaria is common in many African countries.

Sickle cell anaemia is a disorder also found in these countries.

(i) What name is given to types of disorder like sickle cell anaemia?

..... [1]

(ii) Read the information on a new treatment for sickle cell anaemia.

Severe sickle cell anaemia can be treated with a medicine called hydroxyurea.

Doctors are studying the long-term effects of hydroxyurea on people who have sickle cell anaemia.

In an early study, eight children were all given the drug.

Most of the children showed improved growth and general health.

This suggests that hydroxyurea helps to improve the health of people with sickle cell anaemia.

Use the information in the article to answer the question.

Doctors are **not** convinced that hydroxyurea helps to improve the health of people with sickle cell anaemia.

Explain why.

.....
.....
..... [2]

[Total: 7]

3 Coronary heart disease (CHD) is one of the UK's biggest killers.

88 000 people died from CHD in 2008.

Since 2000, health authorities have been trying to lower the death rate from CHD.

Look at the table.

death rates from CHD per 100 000 population				
year	age 55–64		age 65–74	
	men	women	men	women
2000	291	84	823	347
2001	271	79	763	328
2002	250	72	707	304
2003	238	66	660	275
2004	219	57	599	250
2005	204	54	558	225
2006	194	52	500	207
2007	188	49	471	187
2008	175	47	443	179

(a) (i) Describe the trend in death rates between the years 2000 and 2008.

..... [1]

(ii) Write down one difference between the two age groups.

..... [1]

(iii) In 2008 the total number of deaths per 100 000 population in the 55–64 age group was 222.

Calculate the percentage of these deaths that were men.

answer%

What does the result tell you?

.....
 [2]

(b) Scientists have discovered a new drug.

They think it will help lower the death rate from CHD.

The main cause of CHD is a build up of fat in the arteries.

The new drug is **not** classed as an antibiotic.

Explain why.

.....

.....

..... [2]

[Total: 6]

4 This question is about the nervous system.

(a) Describe how nerve impulses travel along nerves.

.....
..... [2]

(b) Look at the picture.



Andrew is paralysed from the waist down because of spinal damage.

Impulses can travel from a stimulus below Andrew's waist to his central nervous system but he cannot respond.

Explain why Andrew cannot respond.

.....
..... [1]

[Total: 3]

Section B – Module C1

5 Coal, oil and natural gas are non-renewable fuels.

Two scientists estimate how many years it will be before these fuels run out.

Look at the table.

fuel	how many years before the fuel will run out	
	estimate of scientist A	estimate of scientist B
coal	143	417
natural gas	61	167
oil	43	43

(a) Which fossil fuel do the scientists think will run out first?

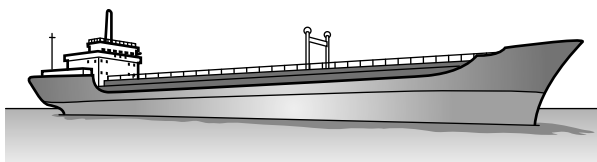
..... [1]

(b) Both scientists used evidence to make their estimates.

Suggest why the two sets of estimates are not the same.

.....
 [1]

(c) Crude oil is often transported across the sea in large ships.



Sometimes these ships have an accident and crude oil spills into the sea.

Write about environmental problems this could cause.

.....

 [2]

[Total: 4]

6 Crude oil contains a mixture of hydrocarbons.

Look at the table. It gives information about some of these hydrocarbons.

hydrocarbon	molecular formula	melting point in °C	boiling point in °C
propane	C ₃ H ₈	-188	-42
butane	C ₄ H ₁₀	-138	0
hexane	C ₆ H ₁₄	-95	69
decane	C ₁₀ H ₂₂	-30	174
hexadecane	C ₁₆ H ₃₄	18	287

(a) Which hydrocarbon has a molecule with a total of **14 atoms**?

Choose from the table.

..... [1]

(b) Larger hydrocarbon molecules contain more carbon atoms.

How does **melting point** change as the molecules get larger?

..... [1]

(c) Petrol has a boiling range from 40°C to 110°C.

Which hydrocarbon is found in petrol?

Choose from the table.

..... [1]

[Total: 3]

Question 7 begins on page 14.

PLEASE DO NOT WRITE ON THIS PAGE

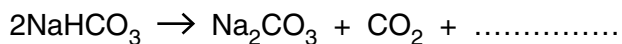
7 Simon investigates baking powder.

He finds it contains sodium hydrogencarbonate, NaHCO_3 .

Sodium hydrogencarbonate breaks down when heated.

(a) Look at the balanced symbol equation. It is not finished.

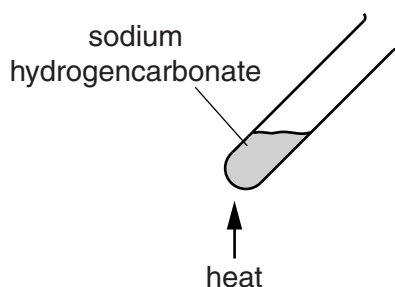
Finish the equation by writing in the missing formula.



[1]

(b) Simon heats a 1.00g sample of sodium hydrogencarbonate for one minute.

Look at the diagram. It shows the apparatus he uses.



He measures the mass of the solid left in the test tube.

Simon repeats the experiment four more times.

Each time he heats the sodium hydrogencarbonate for a different number of minutes.

Look at the table of his results.

time of heating in minutes	1	2	3	4	5
mass of solid left in test tube in grams	0.87	0.73	0.66	0.63	0.63

(i) Simon wants to show that carbon dioxide is made in the reaction.

Describe how Simon can show that carbon dioxide is made.

.....

.....

..... [2]

(ii) After the first minute the mass of solid in the test tube decreases.

After four minutes the mass has stopped decreasing.

Suggest a reason for **each** of these observations.

.....

.....

..... [2]

[Total: 5]

8 Some solvents are used to remove nail varnish.

Stowmarket Synthetics make solvents.

Phil is a research chemist. He finds out information about four solvents.

solvent	is it poisonous?	is it flammable?	will it dissolve	
			red nail varnish?	black nail varnish?
A	yes	yes	yes	yes
B	no	yes	yes	yes
C	no	no	no	no
D	no	yes	no	yes

(a) Which solvent would be the most suitable for use as a nail varnish remover?

answer

Explain your answer.

.....

.....

.....

..... [2]

(b) Phil also wants to use the solvent in a perfume.

He thinks it would be useful to know more information about the solvent.

Write about **two** more pieces of information he should find out about the solvent.

.....

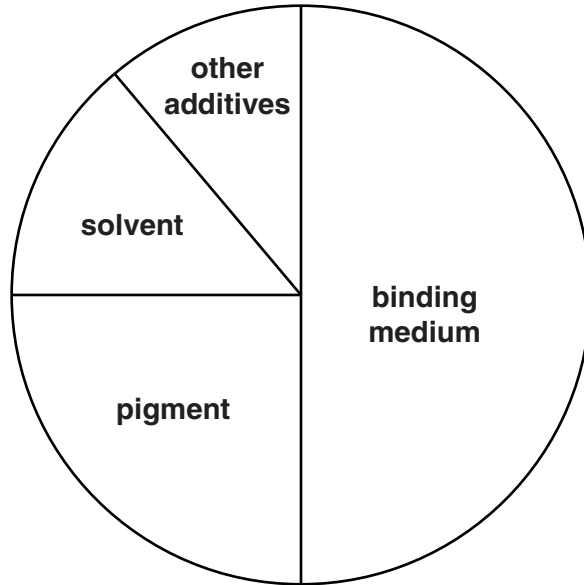
.....

..... [2]

[Total: 4]

9 Paints contain several ingredients.

Look at the pie chart of the ingredients of a paint.



(a) What is the percentage of the ingredient that sticks the paint to a surface?

.....

[1]

(b) Some pigments are **thermochromic**.

Write down one use of a thermochromic pigment and explain why it is suitable for this use.

.....
.....
..... [2]

[Total: 3]

Section C – Module P1

11 (a) Nihal takes a black and white **thermogram** picture of his house.



Explain what the thermogram shows and why it is useful.

.....

.....

.....

..... [2]

(c) Nihal decides to add curtains to all the windows.

type of curtain	cost to fit in £	saving on fuel bills per year in £	payback time in years
lightweight curtains	130	10	
heavyweight curtains	2000	100	

(i) Calculate the **payback time** for **both** types of curtain.

Write your answers in the table.

[1]

(ii) Nihal expects to keep the curtains for 25 years.

Use this information to **explain** which type of curtain would be the **best** to fit.

.....

.....

.....

..... [2]

[Total: 11]

12 Mobile phones use microwave radiation.

(a) Scientific studies look at the **effects** of mobile phone microwave radiation.

(i) Results from these studies are published.

Explain why scientists publish their results.

.....
.....
.....
..... [2]

(ii) Four scientists look at the effects of mobile phone microwave radiation.

Here are their results.

name of scientist	number of people in the study	number of people reporting possible effects
Ethan	1000	15
Jayden	17 000	20
Kiera	18 000	20
Maisie	30 000	30

One conclusion is that

- Ethan’s results show 1.5% of the people reported possible effects. However, the number of people in the study is too low for it to be accurate.

Use the **data** in the table to suggest **another** conclusion.

.....
.....
..... [1]

(b) Annabel likes to text on her mobile phone.



Her parents worry about the length of time she spends using her mobile phone.

Write about some of the health **concerns** they may have.

.....

.....

.....

..... [2]

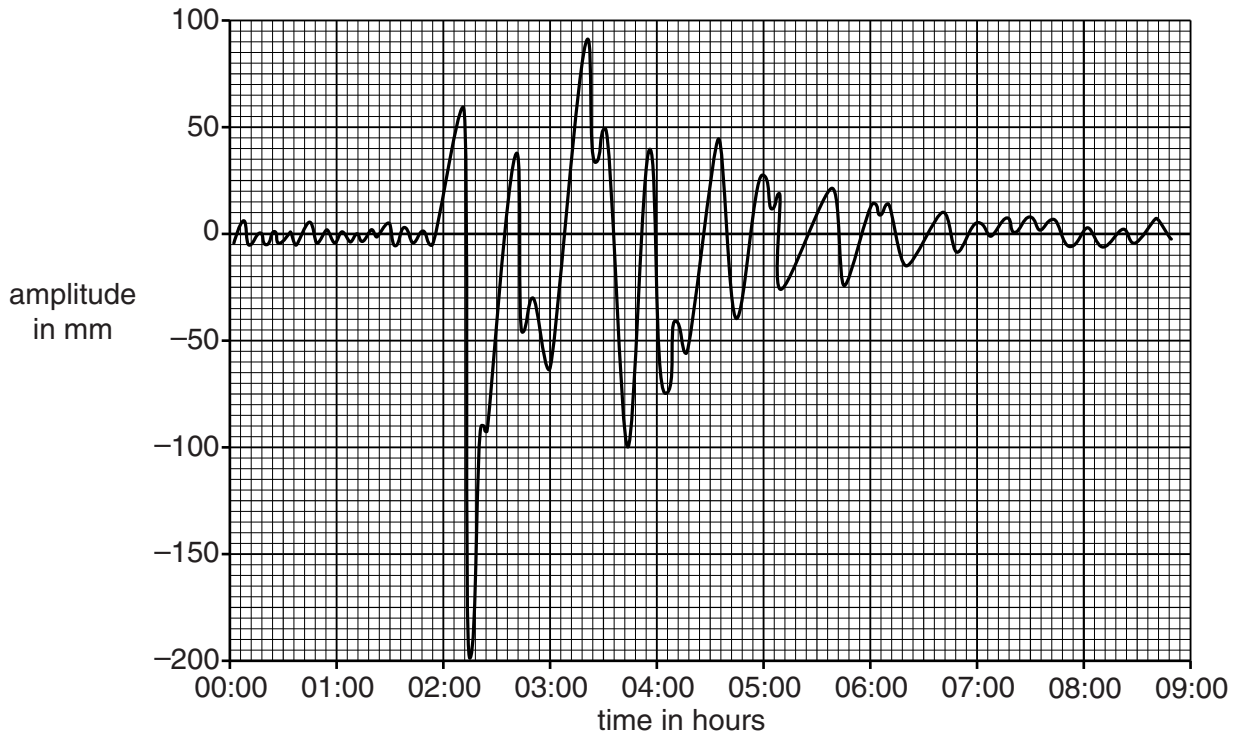
[Total: 5]

13 Earthquakes produce shock waves.

(a) Write down the **name** of the equipment used to **detect** earthquakes.

..... [1]

(b) Look at the recording of shock waves.



Different sized shock waves were recorded.

(i) What is the **amplitude** of the largest shock wave?

..... mm [1]

(ii) What **time** is it recorded at?

..... hours [1]

(c) The **two** types of seismic waves are **P waves** and **S waves**.

Which type of wave will be seen first on the recording and why?

type of wave

reason

..... [1]

[Total: 4]

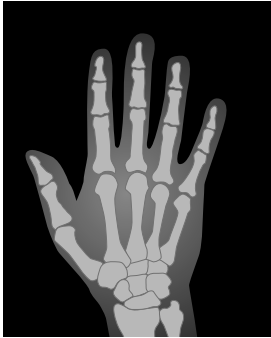
25
BLANK PAGE

Question 14 begins on page 26.

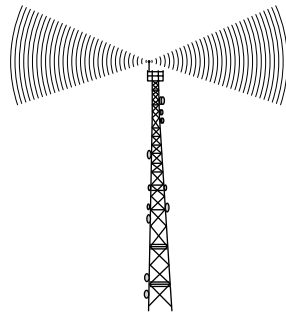
PLEASE DO NOT WRITE ON THIS PAGE

14 This question is about the **electromagnetic spectrum**.

Look at the diagrams.



X-ray of a hand



radio mast



microwave oven



candles giving off visible light



ultraviolet light showing a hand print

(a) The diagrams show five different types of electromagnetic wave being used.

Put the five types of electromagnetic wave in the table to show **increasing** frequency.

Two have been done for you.

frequency in Hz	order of frequency	type of electromagnetic wave
10^6	lowest ↓ highest	
10^{10}		microwave
10^{15}		
10^{16}		ultraviolet
10^{18}		

[1]

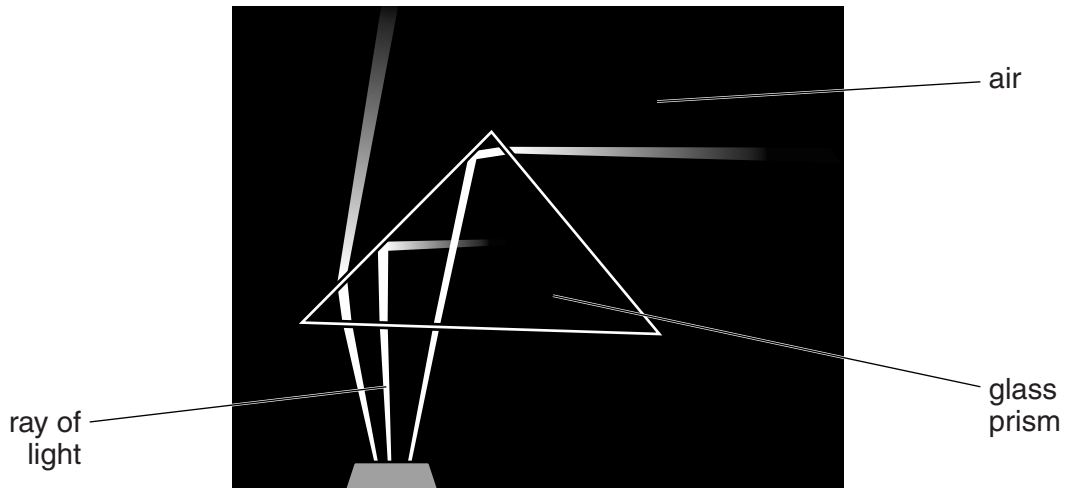
(b) Infrared waves have a frequency **between** visible light and microwaves.

Use the data in the table to estimate the frequency of infrared waves.

answer Hz

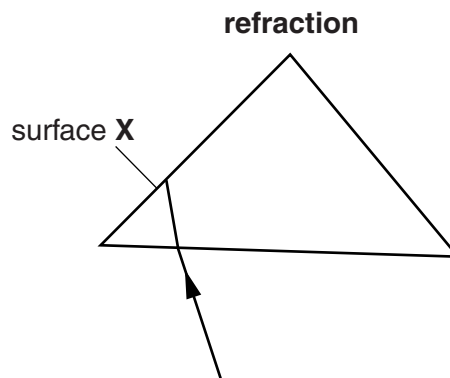
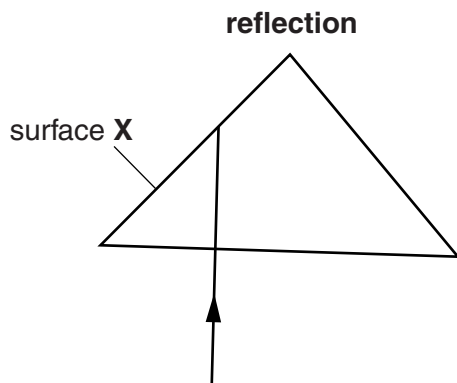
[1]

(c) Look at the picture of a prism.



Rays of light are being reflected **and** refracted.

Complete the diagrams to show where reflection and refraction happen at surface **X** and explain why refraction happens.



explanation

.....

..... [3]

[Total: 5]

END OF QUESTION PAPER

BLANK PAGE

PLEASE DO NOT WRITE ON THIS PAGE

BLANK PAGE

PLEASE DO NOT WRITE ON THIS PAGE

30
BLANK PAGE

PLEASE DO NOT WRITE ON THIS PAGE

PLEASE DO NOT WRITE ON THIS PAGE



Copyright Information

OCR is committed to seeking permission to reproduce all third-party content that it uses in its assessment materials. OCR has attempted to identify and contact all copyright holders whose work is used in this paper. To avoid the issue of disclosure of answer-related information to candidates, all copyright acknowledgements are reproduced in the OCR Copyright Acknowledgements Booklet. This is produced for each series of examinations and is freely available to download from our public website (www.ocr.org.uk) after the live examination series.

If OCR has unwittingly failed to correctly acknowledge or clear any third-party content in this assessment material, OCR will be happy to correct its mistake at the earliest possible opportunity.

For queries or further information please contact the Copyright Team, First Floor, 9 Hills Road, Cambridge CB2 1GE.

OCR is part of the Cambridge Assessment Group; Cambridge Assessment is the brand name of University of Cambridge Local Examinations Syndicate (UCLES), which is itself a department of the University of Cambridge.

