

- 1 A particle P of mass m is attached to one end of a light inextensible string of length a . The other end of the string is attached to a fixed point O. The particle P is moving, with negligible air resistance, in a complete vertical circle with centre O. When P is at its highest point the speed of P is V . The horizontal line CD lies in the plane of the motion and passes through the lowest point of the circular path of P. Fig. 1 shows the particle at a point where OP makes an angle θ with the upward vertical.

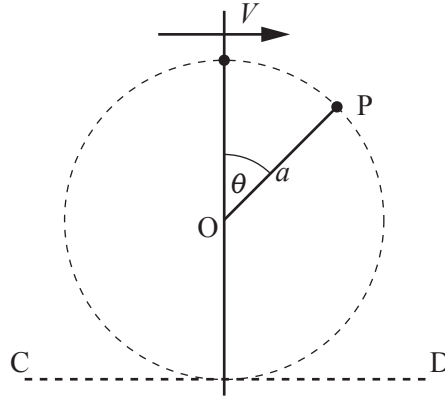


Fig. 1

- (i) Show that the least possible value of V is \sqrt{ag} . [2]

- (ii) Given that $V = \sqrt{ag}$, find an expression, in terms of m , g and θ , for the tension in the string when P is in the position shown in Fig. 1. [6]

Now consider the case $V = \sqrt{3ag}$.

- (iii) Find the vertical height of P above CD when the tension in the string is equal to twice its minimum value. [6]

Suppose now that $V = \sqrt{kag}$, where k is a positive constant.

The string breaks if the tension in it exceeds $12mg$.

- (iv) Find the set of values that k can take so that P is able to complete vertical circles. [3]

- 2 (a) A moving car experiences a force F due to air resistance. It is known that F depends on a product of powers of its velocity v , its cross-sectional area A and the air density ρ , and is given by

$$F = \frac{1}{2} C \rho^\alpha v^\beta A^\gamma,$$

where C is a dimensionless constant known as the drag coefficient.

- (i) Write down the dimensions of force and density. [2]
- (ii) Use dimensional analysis to find α , β and γ . [5]

(b)

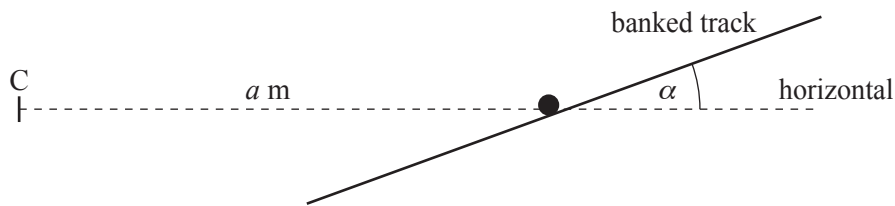


Fig. 2

A motorcyclist is riding his motorcycle around a circular banked track. The track is banked at an angle α to the horizontal, where $\tan \alpha = \frac{1}{4}$. The combined mass of the motorcycle and rider is M kg. The motion of the motorcycle and rider is modelled as a particle travelling at constant speed in a horizontal circle, with centre C and radius a m, on the banked track, as shown in Fig. 2.

- (i) Given that there is no tendency for the motorcyclist to slip up or down the slope when his speed is $5\sqrt{g}$ ms^{-1} , show that $a = 100$. [4]

Suppose now that the coefficient of friction between the motorcyclist and the track is μ .

- (ii) Given that the maximum constant speed for which motion in the horizontal circle centre C is possible is 28 ms^{-1} , find the value of μ . [7]

- 3 Fig. 3 shows a smooth plane inclined at an angle of 30° to the horizontal. A particle P of mass 3 kg lies on the plane. One end of a light elastic string, of natural length 2 m, is attached to P and the other end is fixed to a point A. One end of a second light elastic string, of natural length 1 m, is attached to P and the other end is fixed to a point B. Both strings are made from material with modulus of elasticity 12.25 N. APB is parallel to the plane on a line of greatest slope, and the distance AB is 6 m.

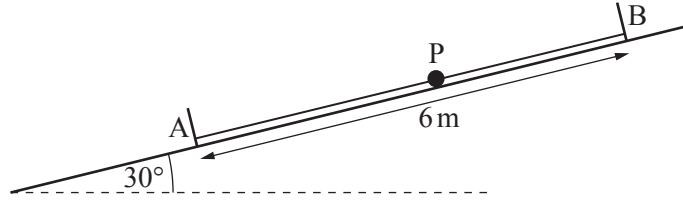


Fig. 3

The particle P moves along part of the line AB with both strings taut throughout the motion.

- (i) Show that, when the extension of the string AP is x m, the tension in the string BP is $12.25(3-x)$ N. Show also that the value of x for which the system is in equilibrium is 1.2. [4]

The particle P is released from rest when $AP = 3.35$ m. At time t s, the displacement of P from its equilibrium position is y m, measured in the direction AB.

- (ii) Show that the motion of P is simple harmonic with equation

$$\frac{d^2y}{dt^2} = -6.125y.$$

State the period of the motion.

[8]

The point C is on the line AB, between A and B, such that $AC = 3.1$ m.

- (iii) Find the speed of P when it is at C. [2]
- (iv) Find the time elapsed after its release from rest until P is at C moving **up** the plane for the first time. [5]

- 4 Fig. 4.1 shows the shaded region R bounded by the curve $y = 2x^{-\frac{1}{2}}$ for $1 \leq x \leq 4$, the x -axis and the lines $x = 1$ and $x = 4$.

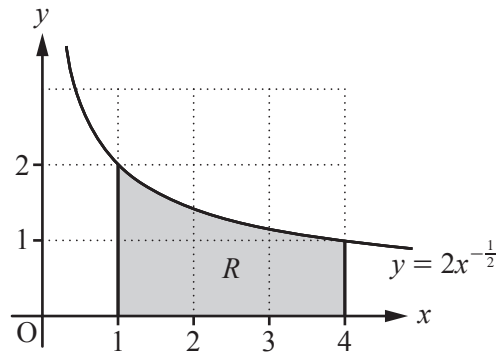


Fig. 4.1

- (i) Find the exact coordinates of the centre of mass of a uniform lamina occupying the region R . [6]

Fig. 4.2 shows the shaded region S bounded by the curve $y = 2x^{-\frac{1}{2}}$ for $1 \leq x \leq 4$, the x -axis and the lines $x = 4$ and $y = 2x$. The line $y = 2x$ meets the curve $y = 2x^{-\frac{1}{2}}$ at the point A with coordinates $(1, 2)$.

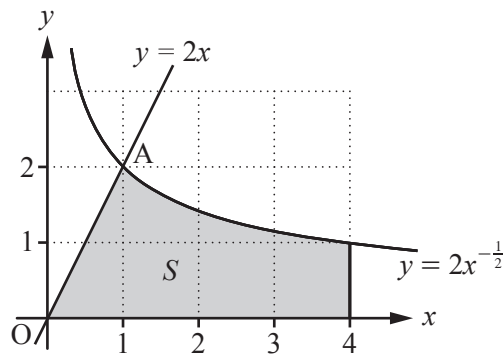


Fig. 4.2

The region S is rotated through 2π radians about the x -axis to form a uniform solid of revolution.

- (ii) Show that the x -coordinate of the centre of mass of this solid is $\frac{39}{4(1+6\ln 2)}$.

(You may assume the standard results for the volume and the position of the centre of mass of a uniform solid cone.) [8]

- (iii) The solid is suspended from a point on the circle described by A when S is rotated about the x -axis. Find the angle between AO and the vertical. [4]

END OF QUESTION PAPER

BLANK PAGE

BLANK PAGE

**Copyright Information**

OCR is committed to seeking permission to reproduce all third-party content that it uses in its assessment materials. OCR has attempted to identify and contact all copyright holders whose work is used in this paper. To avoid the issue of disclosure of answer-related information to candidates, all copyright acknowledgements are reproduced in the OCR Copyright Acknowledgements Booklet. This is produced for each series of examinations and is freely available to download from our public website (www.ocr.org.uk) after the live examination series.

If OCR has unwittingly failed to correctly acknowledge or clear any third-party content in this assessment material, OCR will be happy to correct its mistake at the earliest possible opportunity.

For queries or further information please contact the Copyright Team, First Floor, 9 Hills Road, Cambridge CB2 1GE.

OCR is part of the Cambridge Assessment Group; Cambridge Assessment is the brand name of University of Cambridge Local Examinations Syndicate (UCLES), which is itself a department of the University of Cambridge.