

**ENTRY LEVEL CERTIFICATE**  
**MATHEMATICS**  
 Practical Task Specimen Paper

**R448/P**

Candidates answer on the question paper

**OCR Supplied Materials:**  
 None

**Other Materials Required:**

- Calculator
- Ruler

Candidate Forename		Candidate Surname	
-----------------------	--	----------------------	--

Centre Number						Candidate Number				
------------------	--	--	--	--	--	---------------------	--	--	--	--

**INSTRUCTIONS TO CANDIDATES**

- Write your name, centre number and candidate number in the spaces above.
- Answer **all** questions.
- Write your answers in the spaces provided on the question paper.
- Show all your working.

**INFORMATION FOR CANDIDATES**

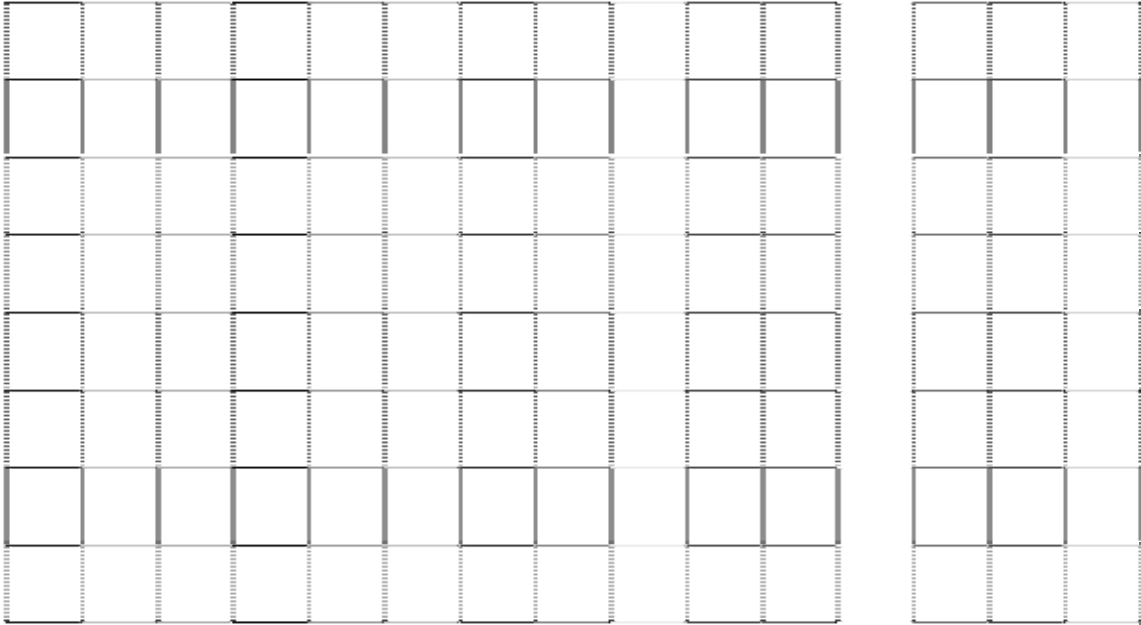
- You may use a calculator for this task.
- This document consists of **8** pages.  
 Any blank pages are indicated.

<b>FOR TEACHER'S USE</b>	
<b>Q1 Mark</b>	
<b>Q2 Mark</b>	
<b>Q3 Mark</b>	
<b>Q4 Mark</b>	
<b>Q5 Mark</b>	
<b>Q6 Mark</b>	
<b>Q7 Mark</b>	
<b>Q8 Mark</b>	
<b>Total Mark (Max 20)</b>	

### Practical Task – Lucy’s Garden

Lucy’s vegetable plot is a rectangle.

1 (a) Draw a rectangle on the grid below.



[1]

(b) Complete this sentence.

A rectangle has ..... sides and ..... corners.

[2]

2 Lucy put some vegetables in her plot.  
Look at the picture below.



(a) How many plants are there?

..... [1]

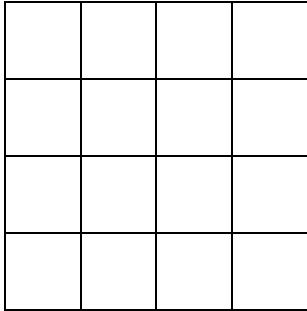
Lucy bought 8 plants altogether.  
Isaac bought 1 plant less than Lucy.

(b) How many plants did Isaac buy?

..... [1]

- 3 Lucy's flower bed is in the shape of a square. She wants to plant half with yellow petunias.

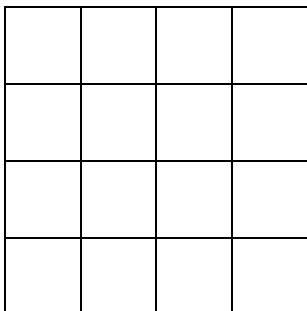
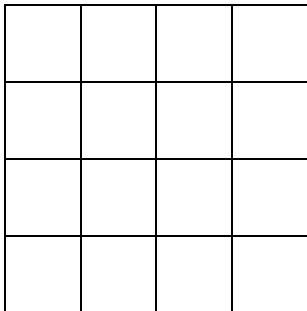
(a) Shade half of this diagram.



[1]

(b) Show two more different ways of doing this.

Each diagram should be shaded differently.



[2]

4 Lucy has these coins in her purse.



(a) Sort the coins into two groups. [1]

(b) Describe each group.

(i) .....

(ii) .....

[2]

(c) How much money does Lucy have in her purse?

.....p [1]

5 Lucy paid £2.40 for her plants.

Look at the photograph below. This is how she paid.



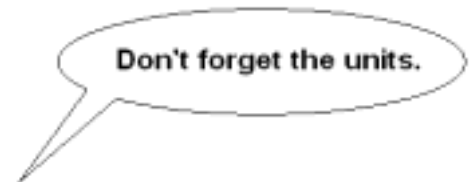
How much change should she get?

£.....[1]

6 Lucy sold 4 plants to Stephen.

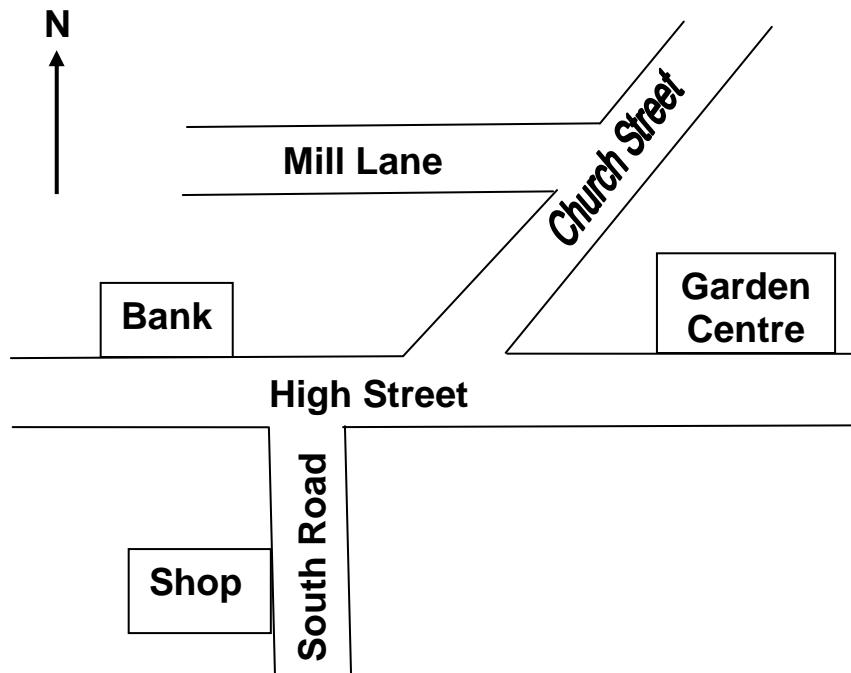
Stephen paid Lucy 40p for each plant.

How much money did Stephen pay Lucy?



..... [2]

7 This is a map of Lucy's village.



(a) Which street is parallel to the High Street?

..... [1]

(b) Lucy walks from the Bank to the Garden centre.  
In what direction does she walk?

..... [1]

8 Lucy needs to do some calculations.

Use your calculator to find the answers to the following.

(a)  $235 + 88$

..... [1]

(b)  $87 - 39$

..... [1]

(c)  $22 \times 18$

..... [1]



**Copyright Information:**

**Q5** Images of United Kingdom coins © Crown Copyright

**Q6** Five pound note © Bank of England

OCR is committed to seeking permission to reproduce all third-party content that it uses in its assessment materials. OCR has attempted to identify and contact all copyright holders whose work is used in this paper. To avoid the issue of disclosure of answer-related information to candidates, all copyright acknowledgements are reproduced in the OCR Copyright Acknowledgements Booklet. This is produced for each series of examinations, is given to all schools that receive assessment material and is freely available to download from our public website ([www.ocr.org.uk](http://www.ocr.org.uk)) after the examination series.

If OCR has unwittingly failed to correctly acknowledge or clear any third-party content in this assessment material, OCR will be happy to correct its mistake at the earliest possible opportunity.

For queries or further information please contact the Copyright Team, First Floor, 9 Hills road, Cambridge CB2 1GE.

OCR is part of the Cambridge Assessment Group; Cambridge Assessment is the brand name of University of Cambridge Local Examinations Syndicate (UCLES), which is itself a department of the University of Cambridge.